

CANDIDATE  
NAME

**SOLVED BY SMART EDU HUB**

CENTRE  
NUMBER

--	--	--	--	--

CANDIDATE  
NUMBER

--	--	--	--

**MATHEMATICS**

**0580/41**

Paper 4 (Extended)

**May/June 2018**

**2 hours 30 minutes**

Candidates answer on the Question Paper.

Additional Materials:      Electronic calculator  
   Tracing paper (optional)

Geometrical instruments

**READ THESE INSTRUCTIONS FIRST**

Write your Centre number, candidate number and name on all the work you hand in.

Write in dark blue or black pen.

You may use an HB pencil for any diagrams or graphs.

Do not use staples, paper clips, glue or correction fluid.

**DO NOT WRITE IN ANY BARCODES.**

Answer **all** questions.

If working is needed for any question it must be shown below that question.

Electronic calculators should be used.

If the degree of accuracy is not specified in the question, and if the answer is not exact, give the answer to three significant figures. Give answers in degrees to one decimal place.

For  $\pi$ , use either your calculator value or 3.142.

At the end of the examination, fasten all your work securely together.

The number of marks is given in brackets [ ] at the end of each question or part question.

The total of the marks for this paper is 130.

IGCSE Physics/ Chemistry/Math-Additional/ International/  
Extended/Biology/Economics/English/Hindi/ Combined Science/  
Coordinated Science

**For 2023/2024/2025 Board Exams**

Revision Notes/Video Lectures/Topic-wise Past Papers/Topic-wise Model Solutions-  
Year wise Solved past Papers [Model Solutions] Expert-tips/Key Definitions

By-Smart Exam Resources

**One Membership  
Multiple benefits**

**View Now**

This document consists of **19** printed pages and **1** blank page.

1 Adele, Barbara and Collette share \$680 in the ratio 9 : 7 : 4.

(a) Show that Adele receives \$306.

$$\text{Adele receives: } \frac{9}{9+7+4} \times 680 = 306$$

Adele \$ ..... **306** .....

(b) Calculate the amount that Barbara and Collette each receives.

$$\text{Barbara receives: } \frac{7}{9+7+4} \times 680 = 238$$

$$\text{Collette receives: } \frac{4}{9+7+4} \times 680 = 136$$

Barbara \$ ..... **238** .....  
Collette \$ ..... **136** ..... [3]

(c) Adele changes her \$306 into euros (€) when the exchange rate is €1 = \$1.125 .  
Calculate the number of euros she receives.

$$\text{€1} = \text{\$1.125}$$

$$\text{€ x} = \text{\$306}$$

Hence we get:

$$1.125x = 306$$

$$\text{So, } x = 306/1.125 = \text{€272}$$

€ ..... **272** ..... [2]

(d) Barbara spends a total of \$17.56 on 5 kg of apples and 3 kg of bananas.  
Apples cost \$2.69 per kilogram.

Calculate the cost per kilogram of bananas.

Let number of apples be "a" and bananas be "b"

$$\text{Hence: } 5a + 3b = 17.56$$

$$\text{So, } 5(2.69) + 3b = 17.56$$

$$\text{Hence } b = \frac{17.56 - 5(2.69)}{3} = 1.37$$

\$ ..... **1.37** ..... [3]

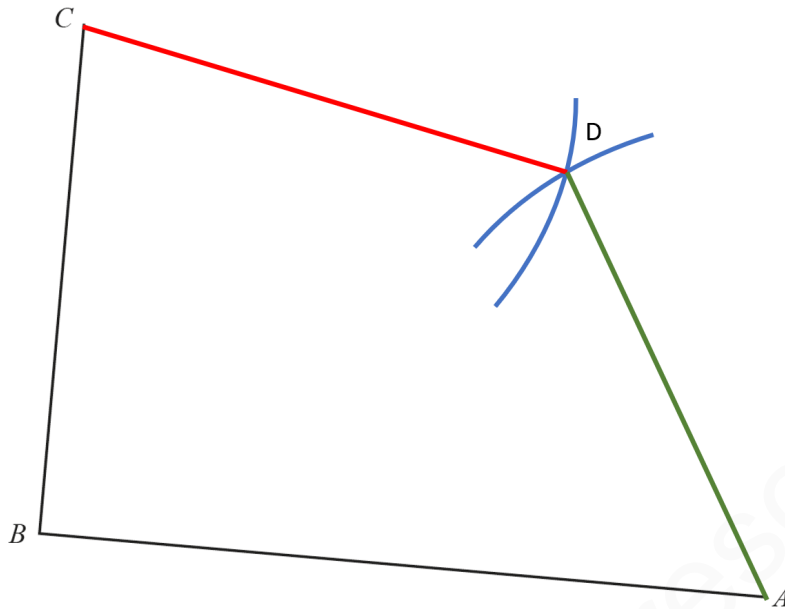
(e) Collette spends half of her share on clothes and  $\frac{1}{5}$  of her share on books.  
Calculate the amount she has left.

Amount left with Collette is:

$$136 - 136\left(\frac{1}{2} + \frac{1}{5}\right) = 40.8$$

\$ ..... **40.8** ..... [3]

- 2 The scale drawing shows two boundaries,  $AB$  and  $BC$ , of a field  $ABCD$ .  
The scale of the drawing is 1 cm represents 8 m.



**Hint: Draw arcs of 9cm from C and A respectively**

Scale: 1 cm to 8 m

- (a) The boundaries  $CD$  and  $AD$  of the field are each 72 m long.  
(i) Work out the length of  $CD$  and  $AD$  on the scale drawing.

**Given:**

**1cm=8m**

**For  $CD$  and  $AD$  each,**

**Length on the scale drawing**

**= $72/8=9$ cm**

..... 9 cm [1]

- (ii) **Using a ruler and compasses only**, complete accurately the scale drawing of the field. [2]

- (b) A tree in the field is

- equidistant from  $A$  and  $B$
- and
- equidistant from  $AB$  and  $BC$ .

**This kind of construction is not there in the syllabus**

On the scale drawing, construct two lines to find the position of the tree.

Use a **straight edge and compasses only** and leave in your construction arcs. [4]

- 3 (a) The price of a house decreased from \$82 500 to \$77 500.

Calculate the percentage decrease.

$$\begin{aligned} \text{Percentage decrease} &= \frac{\text{Old price} - \text{New price}}{\text{Old price}} \times 100 \\ &= \frac{82500 - 77500}{82500} \times 100 = 6.06 \end{aligned}$$

6.06

..... % [3]

- (b) Roland invests \$12 000 in an account that pays compound interest at a rate of 2.2% per year.

Calculate the value of his investment at the end of 6 years.

Give your answer correct to the nearest dollar.

**P=\$12000**

**R=2.2% per year**

**T= 6 years**

$$\begin{aligned} \text{Value of his investment} &= \text{Amount} = P \left(1 + \frac{R}{100}\right)^N \\ &= 12000 \left(1 + \frac{2.2}{100}\right)^6 \\ &= \$ 13674 \end{aligned}$$

13674

\$ ..... [3]

IGCSE Physics/ Chemistry/Math-Additional/ International/  
Extended/Biology/Economics/English/Hindi/ Combined Science/  
Coordinated Science

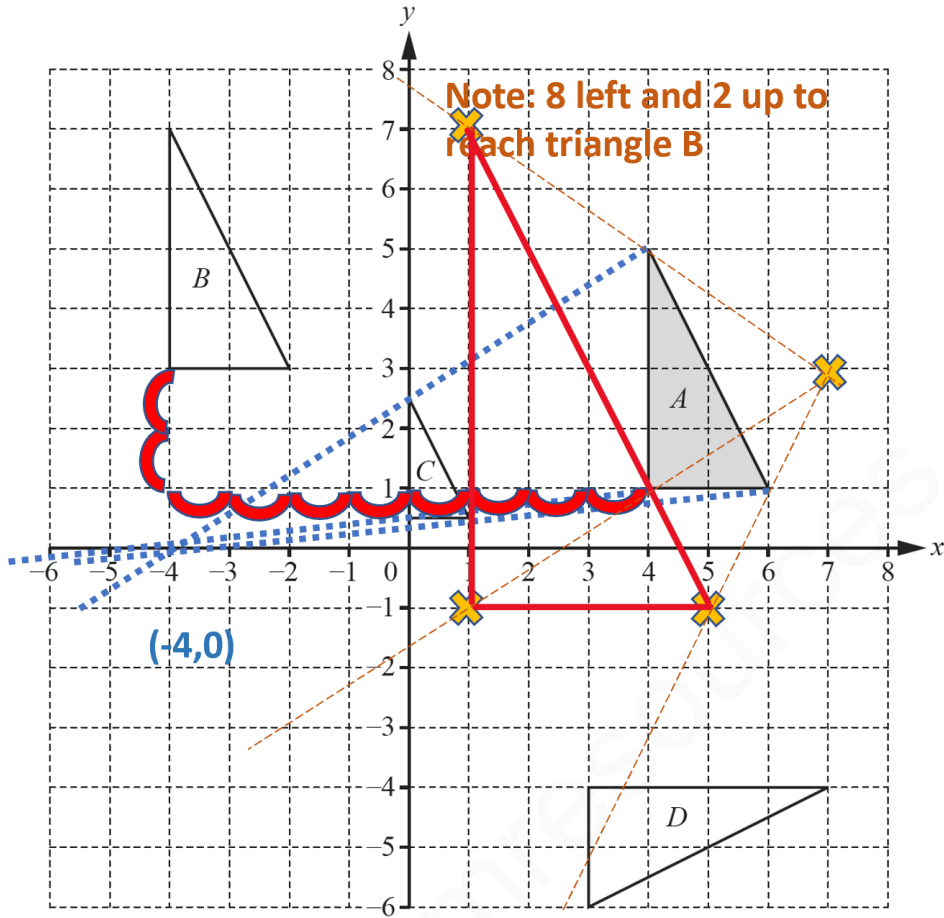
**For 2023/2024/2025 Board Exams**

Revision Notes/Video Lectures/Topic-wise Past Papers/Topic-wise Model Solutions-  
Year wise Solved past Papers [Model Solutions] Expert-tips/Key Definitions

By-Smart Exam Resources

**One Membership  
Multiple benefits**

**View Now**



(a) Describe fully the **single** transformation that maps

(i) triangle *A* onto triangle *B*,  
**Translation**  $\begin{pmatrix} -8 \\ 2 \end{pmatrix}$

..... [2]

(ii) triangle *A* onto triangle *C*,  
**Enlargement, sf=0.5, Centre of enlargement ( -4,0)**

..... [3]

(iii) triangle *A* onto triangle *D*.  
**Rotation 90° Clockwise [This can be easily found using a tracing paper]**

..... [3]

(b) On the grid, draw the image of triangle *A* after an enlargement by scale factor 2, centre (7, 3). [2]

5 (a) Factorise.

(i)  $2mn + m^2 - 6n - 3m$

$$\begin{aligned} & 2mn + m^2 - 6n - 3m \\ & = m(2n+m) - 3(2n+m) \\ & = (m-3)(2n+m) \end{aligned}$$

$$(m-3)(2n+m)$$

..... [2]

(ii)  $4y^2 - 81$

$$\begin{aligned} & 4y^2 - 81 \\ & = (2y)^2 - (9)^2 \\ & = (2y-9)(2y+9) \end{aligned}$$

$$(2y-3)(2y+3)$$

..... [1]

(iii)  $t^2 - 6t + 8$

$$\begin{aligned} & t^2 - 6t + 8 \\ & = t^2 - 2t - 4t + 8 \\ & = t(t-2) - 4(t-2) \\ & = (t-4)(t-2) \end{aligned}$$

$$(t-2)(t-4)$$

..... [2]

(b) Rearrange the formula to make  $x$  the subject.

$$k = \frac{2m-x}{x}$$

$$\begin{aligned} k &= \frac{2m-x}{x} \\ kx &= 2m-x \\ kx+x &= 2m \\ x(k+1) &= 2m \\ x &= \frac{2m}{k+1} \end{aligned}$$

$$x = \frac{2m}{k+1}$$

$x =$  ..... [4]

- (c) Solve the simultaneous equations.  
You must show all your working.

$$\begin{aligned}\frac{1}{2}x - 3y &= 9 \\ 5x + y &= 28\end{aligned}$$

$$\frac{1}{2}x - 3y = 9 \dots \dots > \text{Equation 1}$$

$$5x + y = 28 \dots \dots > \text{Equation 2}$$

Rearranging equation 1:

$$x - 6y = 18$$

$$X = 6y + 18 \dots \dots > \text{Equation 1}$$

Substitute  $x = 6y + 18$  in equation 2:

$$5x + y = 28$$

Hence:

$$5(6y + 18) + y = 28$$

$$30y + 90 + y = 28$$

$$31y = 28 - 90$$

$$31y = -62$$

$$\text{Hence: } y = \frac{-62}{31} = -2$$

$$\text{Also: } 5x + y = 28 \dots \text{Equation} \rightarrow 2$$

$$\text{Hence } 5x - 2 = 28$$

$$5x = 30$$

$$X = 6$$

$$\text{Hence } x = 6 \text{ and } y = -2$$

$$x = 6$$

$$x = \dots \dots \dots$$

$$y = -2$$

$$y = \dots \dots \dots [3]$$

(d)  $\frac{3}{m+4} - \frac{4}{m} = 6$

- (i) Show that this equation can be written as  $6m^2 + 25m + 16 = 0$ .

$$\frac{3}{m+4} - \frac{4}{m} = 6$$

Hence:

$$3m - 4(m+4) = 6(m)(m+4)$$

$$3m - 4m - 16 = 6m^2 + 24m$$

$$-m - 16 = 6m^2 + 24m$$

$$16 + 6m^2 + 24m + m = 0$$

$$6m^2 + 25m + 16 = 0$$

[3]

- (ii) Solve the equation  $6m^2 + 25m + 16 = 0$ .

Show all your working and give your answers correct to 2 decimal places.

Comparing the equation:

$$6m^2 + 25m + 16 \text{ with}$$

$am^2 + bm + c$  we get:

$$a = 6, b = 25 \text{ and } c = 16$$

Hence:

Applying the quadratic formula we get:

$$m = \frac{-25 \pm \sqrt{25^2 - 4(6)(16)}}{2(6)}$$

Plugging in the calculator we get;

$$m = -0.79$$

Or

$$m = -3.38$$

$$-0.79$$

$$-3.38$$

$$m = \dots \dots \dots \text{ or } m = \dots \dots \dots [4]$$

6 A solid hemisphere has volume  $230\text{ cm}^3$ .

(a) Calculate the radius of the hemisphere.

[The volume,  $V$ , of a sphere with radius  $r$  is  $V = \frac{4}{3}\pi r^3$ .]

**Volume of a hemisphere =  $230\text{ cm}^3$**

**Volume of a sphere =  $V = \frac{4}{3}\pi r^3$**

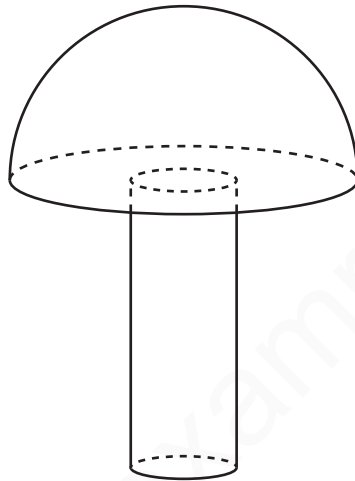
**Volume of a hemisphere  $V = 230 = \frac{4}{6}\pi r^3$**

**Hence:  $r = \sqrt[3]{\frac{230 \times 6}{4\pi}} = \sqrt[3]{\frac{230 \times 3}{2\pi}} = 4.79\text{ cm}$**

**4.79**

..... cm [3]

(b) A solid cylinder with radius  $1.6\text{ cm}$  is attached to the hemisphere to make a toy.



NOT TO  
SCALE

The total volume of the toy is  $300\text{ cm}^3$ .

(i) Calculate the height of the cylinder.

**Total volume of the toy = volume of hemisphere + volume of the cylinder**

$$300 = \frac{4}{6}\pi r^3 + \pi r^2 h$$

$$300 = 230 + \pi r^2 h$$

[Volume of cylinder: Already given]

$$300 - 230 = \pi (1.6)^2 h$$

$$h = \frac{70}{(\pi)1.6^2} = 8.70\text{ cm}$$

IGCSE Physics/ Chemistry/Math-Additional/ International/  
Extended/Biology/Economics/English/Hindi/ Combined Science/  
Coordinated Science  
For 2023/2024/2025 Board Exams  
Revision Notes/Video Lectures/Topic-wise Past Papers/Topic-wise Model Solutions-  
Year wise Solved past Papers [Model Solutions] Expert-tips/Key Definitions  
By-Smart Exam Resources

**One Membership  
Multiple benefits**

**View Now**

..... cm [3]



- (ii) A mathematically similar toy has volume  $19200 \text{ cm}^3$ .

Calculate the radius of the cylinder for this toy.

**Relation between volume of similar objects and their radii is:**

$$\frac{V_1}{V_2} = \left(\frac{r_1}{r_2}\right)^3$$

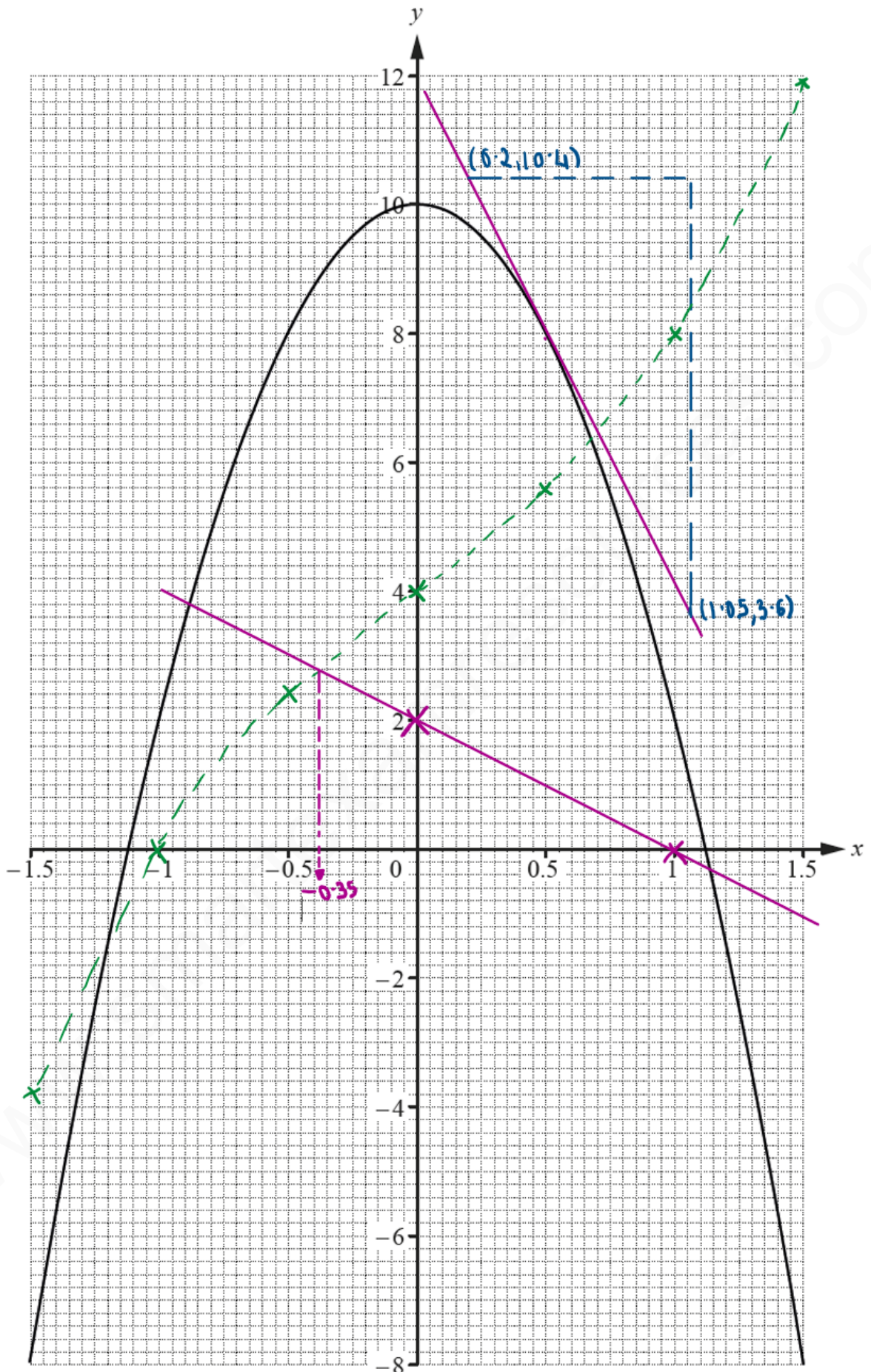
**Hence:**

$$\frac{19200}{300} = \left(\frac{r_1}{1.6}\right)^3$$

$$r_1 = \sqrt[3]{\frac{19200}{300}} \times 1.6 = 6.4$$

**6.4**

..... cm [3]



- (a) Write down the equation of the line of symmetry of the graph.

$$x=0$$

..... [1]

- (b) On the grid opposite, draw the tangent to the curve at the point where  $x = 0.5$ .  
Find the gradient of this tangent.

$$\frac{10 \cdot 4 - 3 \cdot 6}{0 \cdot 2 - 1 \cdot 05} = -8$$

$$-8$$

..... [3]

- (c) The table shows some values for  $y = x^3 + 3x + 4$ .

$x$	-1.5	-1	-0.5	0	0.5	1	1.5
$y$	-3.9	0	2.4	4	5.6	8	11.9

- (i) Complete the table. [3]

- (ii) On the grid opposite, draw the graph of  $y = x^3 + 3x + 4$  for  $-1.5 \leq x \leq 1.5$ . [4]

- (d) Show that the values of  $x$  where the two curves intersect are the solutions to the equation  $x^3 + 8x^2 + 3x - 6 = 0$ .

Equating the equations of the two curves we get:  $10 - 8x^2 = x^3 + 3x + 4$   
Rearranging the equation we get:

$$10 - 4 - 8x^2 - x^3 - 3x = 0$$

$6 - 8x^2 - x^3 - 3x = 0$ , which can be further rewritten as below:

$$x^3 + 8x^2 + 3x - 6 = 0$$

[1]

- (e) By drawing a suitable straight line, solve the equation  $x^3 + 5x + 2 = 0$  for  $-1.5 \leq x \leq 1.5$ .

Draw the line  $y = -2x + 2$

[Because  $x^3 + 3x + 4$  can be rewritten as

$$x^3 + 3x + 2x - 2x + 2 + 2]$$

$x$	0	1
$y = -2x + 2$	2	0

$$x = \dots\dots\dots -0.35 \dots\dots\dots [3]$$

- 8 (a) The exterior angle of a regular polygon is  $x^\circ$  and the interior angle is  $8x^\circ$ .

Calculate the number of sides of the polygon.

$$\text{exterior angle} + \text{interior angle of a polygon} = 180^\circ$$

$$x + 8x = 180$$

$$9x = 180$$

$$x = 20$$

$$\text{Hence: Exterior angle} = 20^\circ \text{ and interior angle} = 8x = 160^\circ$$

$$\text{Value of each interior angle} = \frac{(n-2) \times 180}{n} = 160$$

$$\text{Hence: } 180n - 360 = 160n$$

$$-360 = -20n$$

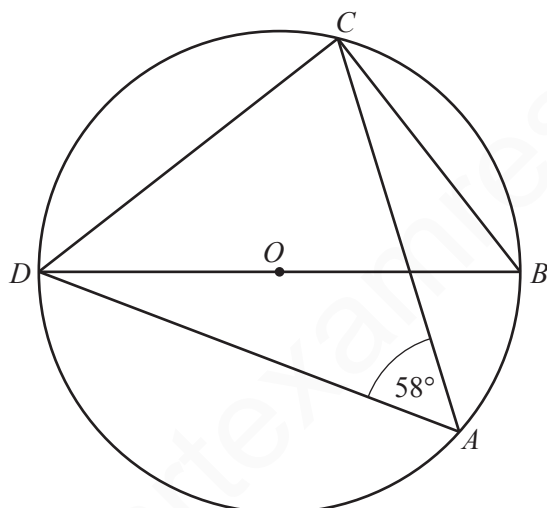
$$n = \frac{360}{20} = 18$$

Hence the polygon has 18 sides

18

..... [3]

(b)



NOT TO  
SCALE

$A, B, C$  and  $D$  are points on the circumference of the circle, centre  $O$ .  
 $DOB$  is a straight line and angle  $DAC = 58^\circ$ .

Find angle  $CDB$ .

$$\angle DBC = \angle DAC = 58^\circ$$

[Angles in the same segment]

$$\angle DCB = 90^\circ$$

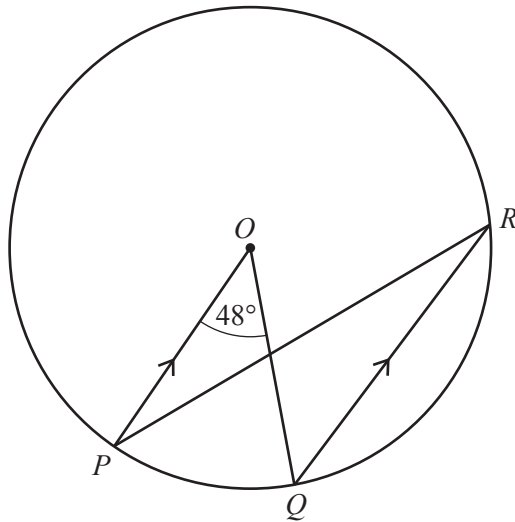
[Angles in a semicircle]

Hence:

$$\angle CDB = 180 - (\angle DCB + \angle DBC) = 180 - (90 + 58) = 32^\circ$$

Angle  $CDB = \dots\dots\dots 32^\circ \dots\dots\dots$  [3]

(c)



NOT TO SCALE

$P, Q$  and  $R$  are points on the circumference of the circle, centre  $O$ .  
 $PO$  is parallel to  $QR$  and angle  $POQ = 48^\circ$ .

(i) Find angle  $OPR$ .

$\angle POQ = \angle OQR = 48^\circ$  [Alternate angles]  
 $\angle POQ = 2 \times \angle PRQ$  [Central angle is twice the angle at the circumference]  
 Hence:  $\angle PRQ = \frac{48}{2} = 24^\circ$   
 Also;  
 $\angle OPR = \angle PRQ$  [Alternate angles]  
 Hence  
 $\angle OPR = 24^\circ$

24

..... [2]

(ii) The radius of the circle is 5.4 cm.

Calculate the length of the **major** arc  $PQ$ .

Angle of the major arc =  $360^\circ - \text{the central angle} = 360^\circ - 48^\circ = 312^\circ$   
 Hence ;  
 Length of the major arc =  $\frac{\theta}{360} \times 2\pi r = \frac{312}{360} \times 2\pi(5.4) = 29.4$

29.4

..... cm [3]

IGCSE Physics/ Chemistry/Math-Additional/ International/  
 Extended/Biology/Economics/English/Hindi/ Combined Science/  
 Coordinated Science  
**For 2023/2024/2025 Board Exams**  
 Revision Notes/Video Lectures/Topic-wise Past Papers/Topic-wise Model Solutions-  
 Year wise Solved past Papers [Model Solutions] Expert-tips/Key Definitions  
 By-Smart Exam Resources

**One Membership  
 Multiple benefits**

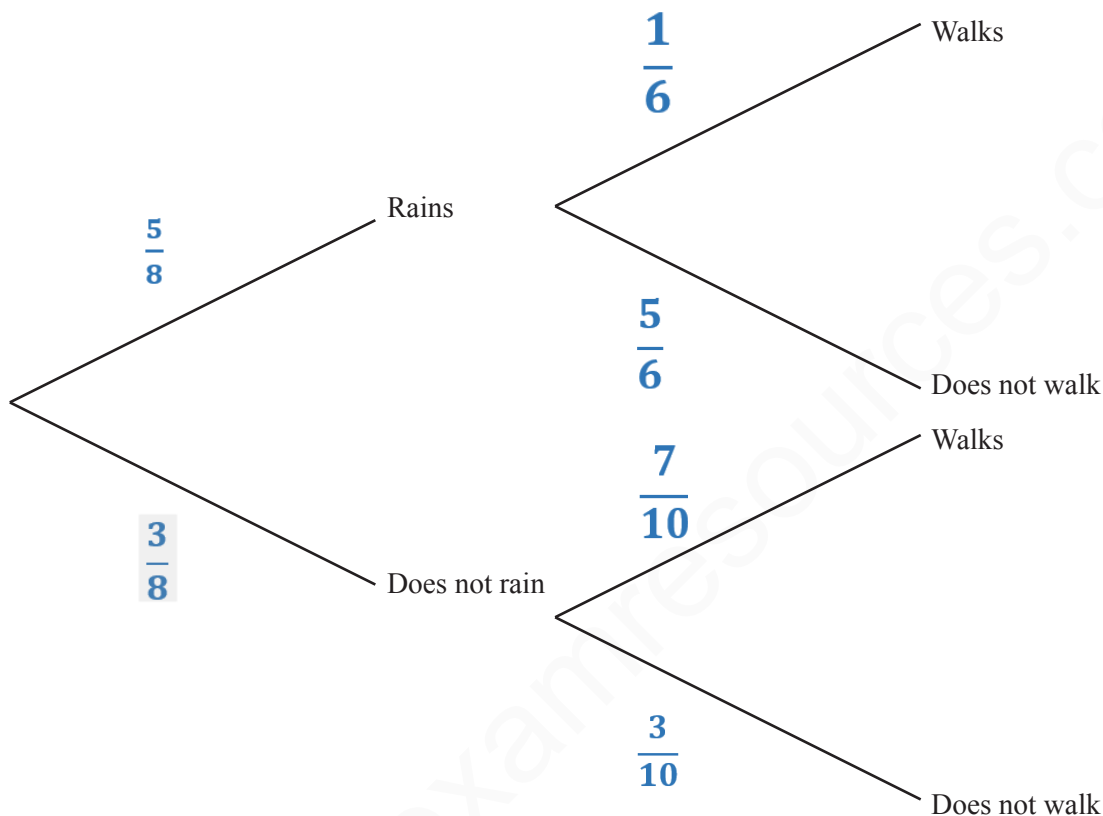
**View Now**

9 The probability that it will rain tomorrow is  $\frac{5}{8}$ .

If it rains, the probability that Rafael walks to school is  $\frac{1}{6}$ .

If it does not rain, the probability that Rafael walks to school is  $\frac{7}{10}$ .

(a) Complete the tree diagram.



[3]

(b) Calculate the probability that it will rain tomorrow and Rafael walks to school.

$$\frac{5}{8} \times \frac{1}{6} = \frac{5}{48}$$

5  
--  
48

..... [2]

(c) Calculate the probability that Rafael does not walk to school.

**Note: This includes the probability that he does not walk to school, irrespective of whether it rains or not.**

$$\frac{5 \times 5}{6 \times 8} + \frac{3 \times 3}{8 \times 10} = \frac{25}{48} + \frac{9}{80} = \frac{304}{480}$$

304  
-----  
480

..... [3]

- 10 (a) In 2017, the membership fee for a sports club was \$79.50. This was an increase of 6% on the fee in 2016. Calculate the fee in 2016.

Let the membership fee in 2016 before increase be \$x

Given that:

$$\left(\frac{6}{100} \times x\right) + x = 79.50$$

$$\left(\frac{6x}{100}\right) + x = 79.50$$

$$\frac{106x}{100} = 79.50$$

$$106x = 7950$$

$$x = \frac{7950}{106} = 75$$

Hence the fee in 2016 was \$75

\$ <sup>75</sup> ..... [3]

- (b) On one day, the number of members using the exercise machines was 40, correct to the nearest 10. Each member used a machine for 30 minutes, correct to the nearest 5 minutes.

Calculate the lower bound for the number of minutes the exercise machines were used on this day.

One member used the machine for 30 minutes correct to 10 minutes. Hence :

Time<sub>LB</sub> = 27.5 minutes

Time<sub>UB</sub> = 32.5 minutes

Total members that used the exercise machine = 40

Hence Members<sub>LB</sub> = 35

Hence the Total time<sub>LB</sub> that the exercise machine got used on this day = 35 x 27.5 = 962.5

IGCSE Physics/ Chemistry/Math-Additional/ International/  
Extended/Biology/Economics/English/Hindi/ Combined Science/  
Coordinated Science

For 2023/2024/2025 Board Exams

Revision Notes/Video Lectures/Topic-wise Past Papers/Topic-wise Model Solutions-  
Year wise Solved past Papers [Model Solutions] Expert-tips/Key Definitions

By-Smart Exam Resources

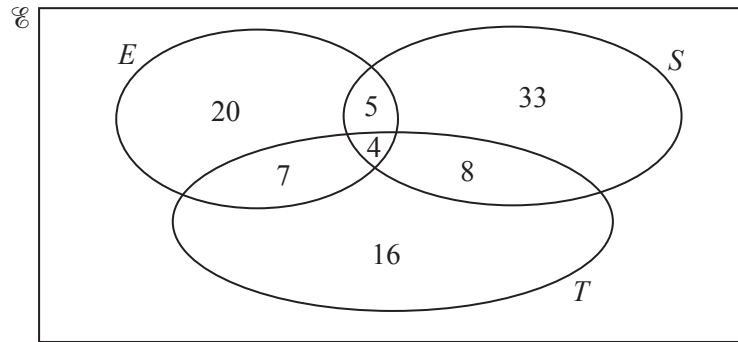
One Membership  
Multiple benefits

View Now

962.5

..... min [2]

- (c) On another day, the number of members using the exercise machines ( $E$ ), the swimming pool ( $S$ ) and the tennis courts ( $T$ ) is shown on the Venn diagram.



- (i) Find the number of members using only the tennis courts.

**Note:** It is that part of Set T that excludes all the overlapping regions

16

..... [1]

- (ii) Find the number of members using the swimming pool.

**Method:**  $5+4+8+33=50$

50

**Note:** [ Add all members in the Swimming pool circle]

..... [1]

- (iii) A member using the swimming pool is chosen at random.

Find the probability that this member also uses the tennis courts and the exercise machines.

**Note:**

This refers to those members that use all the three, hence it is the intersection region of all the three circles

4

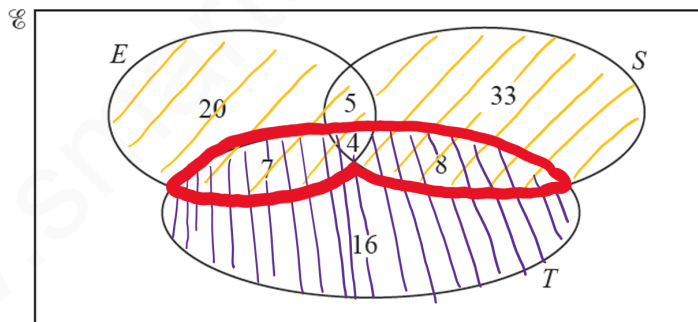
--

50

..... [2]

- (iv) Find  $n(T \cap (E \cup S))$ .

**Note:** The following diagram is not needed. It is only to aid your understanding of the concept



The required region has  $7+4+8=19$  members as shown above by the region bordered in red

19

----- [1]



11 (a)  $\vec{OA} = \begin{pmatrix} 4 \\ 3 \end{pmatrix}$        $\vec{AB} = \begin{pmatrix} 8 \\ -7 \end{pmatrix}$        $\vec{AC} = \begin{pmatrix} -3 \\ 6 \end{pmatrix}$

Find

(i)  $|\vec{OB}|$ ,

**Distance formula**

$$= \begin{pmatrix} 4 + 8 \\ 3 - 7 \end{pmatrix} = \begin{pmatrix} 12 \\ -4 \end{pmatrix} = \sqrt{12^2 + (-4)^2} = 12.6$$

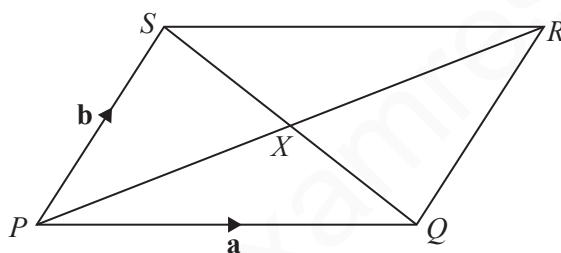
$$|\vec{OB}| = \dots\dots\dots 12.6 \quad [3]$$

(ii)  $\vec{BC}$ .

$$\begin{aligned} \vec{BC} &= \vec{BA} + \vec{AC} \\ &= \begin{pmatrix} -8 \\ 7 \end{pmatrix} + \begin{pmatrix} -3 \\ 6 \end{pmatrix} = \begin{pmatrix} -11 \\ 13 \end{pmatrix} \end{aligned}$$

$$\vec{BC} = \begin{pmatrix} -11 \\ 13 \end{pmatrix} \quad [2]$$

(b)



NOT TO SCALE

$PQRS$  is a parallelogram with diagonals  $PR$  and  $SQ$  intersecting at  $X$ .

$\vec{PQ} = \mathbf{a}$  and  $\vec{PS} = \mathbf{b}$ .

Find  $\vec{QX}$  in terms of  $\mathbf{a}$  and  $\mathbf{b}$ .

Give your answer in its simplest form.

**Note that the diagonals of a parallelogram bisect each other.**

**This implies:**

$QX = XS$

$QX = \frac{1}{2}QS$

$QS = -\mathbf{a} + \mathbf{b}$ . Hence;  $QX = \frac{1}{2}(\mathbf{b} - \mathbf{a})$

$$\vec{QX} = \dots\dots\dots \frac{1}{2}(\mathbf{b} - \mathbf{a}) \quad [2]$$

(c)  $\mathbf{M} = \begin{pmatrix} 2 & 5 \\ 1 & 8 \end{pmatrix}$

Calculate

(i)  $\mathbf{M}^2$ ,

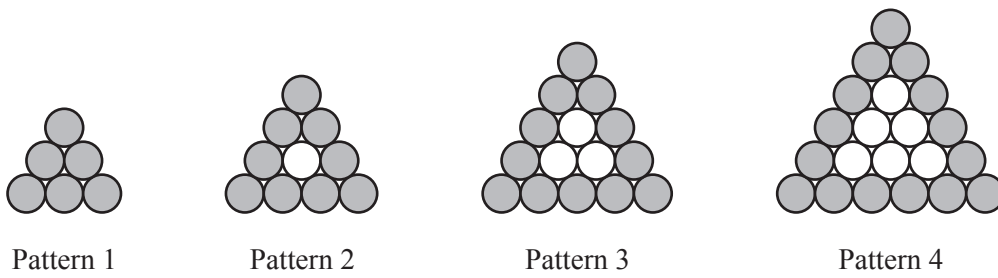
(ii)  $\mathbf{M}^{-1}$ .

$\mathbf{M}^2 = \begin{pmatrix} & \\ & \end{pmatrix}$  [2]

$\mathbf{M}^{-1} = \begin{pmatrix} & \\ & \end{pmatrix}$  [2]

**OUT OF SYLLABUS**

12 Marco is making patterns with grey and white circular mats.



The patterns form a sequence.

Marco makes a table to show some information about the patterns.

Pattern number	1	2	3	4	5
Number of grey mats	6	9	12	15	18
Total number of mats	6	10	15	21	28

(a) Complete the table for Pattern 5.

[2]

(b) Find an expression, in terms of  $n$ , for the number of grey mats in Pattern  $n$ .

Pattern number	1	2	3	4	5
Number of grey mats	6	9	12	15	18

The above is a linear sequence as its first difference is constant. Hence its  $n$ th term is given by:

$$t_n = a + (n - 1)d = 6 + (n - 1)3 = 6 + 3n - 3 = 3n + 3$$

(c) Marco makes a pattern with 24 grey mats.

$3n+3$  ..... [2]

$3n+3=24$   
Hence  $3n=21$   
Hence:  $n=7$

Pattern number	1	2	3	4	5		
Number of grey mats	6	9	12	15	18		
Total number of mats	6	10	15	21	28	36	45

45

..... [2]

- (d) Marco needs a total of 6 mats to make the first pattern.  
 He needs a total of 16 mats to make the first two patterns.  
 He needs a total of  $\frac{1}{6}n^3 + an^2 + bn$  mats to make the first  $n$  patterns.

Find the value of  $a$  and the value of  $b$ .

$$\text{For Pattern 1; } \frac{1}{6}(1)^3 + a(1)^2 + b(1) = \frac{1}{6} + a + b = 6 \text{ ---} \rightarrow \text{Equation 1}$$

$$\text{For Pattern 2; } \frac{1}{6}(2)^3 + a(2)^2 + b(2) = \frac{8}{6} + 4a + 2b = 16 \text{ ---} \rightarrow \text{Equation 2}$$

**Simplifying equation 1 and 2 we get;**

$$6a + 6b = 35 \text{ ---} \rightarrow \text{Equation - 3}$$

**And**

$$24a + 12b = 88 \text{ ---} \rightarrow \text{Equation 4}$$

**Multiplying equation 3 by 2 we get:**

$$12a + 12b = 70 \text{ ---} \rightarrow \text{Equation-5}$$

**Solving Equation 3 and equation 5 simultaneously we get:**

$$24a + 12b = 88 \text{ ---} \rightarrow \text{Equation 4}$$

$$-[ 12a + 12b = 70 ] \text{ ---} \rightarrow \text{Equation 5}$$

$$12a = 18$$

$$a = \frac{18}{12} = \frac{3}{2}$$

**Substituting value of a in Equation 3 we get:**

$$6a + 6b = 35$$

**Hence:**

$$6\left(\frac{3}{2}\right) + 6b = 35$$

$$6b = 35 - 9$$

$$6b = 26$$

$$b = \frac{26}{6} = \frac{13}{3}$$

$$a = \frac{3}{2} \dots\dots\dots$$

$$b = \frac{13}{3} \dots\dots\dots [6]$$

---

Permission to reproduce items where third-party owned material protected by copyright is included has been sought and cleared where possible. Every reasonable effort has been made by the publisher (UCLES) to trace copyright holders, but if any items requiring clearance have unwittingly been included, the publisher will be pleased to make amends at the earliest possible opportunity.

To avoid the issue of disclosure of answer-related information to candidates, all copyright acknowledgements are reproduced online in the Cambridge International Examinations Copyright Acknowledgements Booklet. This is produced for each series of examinations and is freely available to download at [www.cie.org.uk](http://www.cie.org.uk) after the live examination series.

Cambridge International Examinations is part of the Cambridge Assessment Group. Cambridge Assessment is the brand name of University of Cambridge Local Examinations Syndicate (UCLES), which is itself a department of the University of Cambridge.