



Cambridge IGCSE™

CANDIDATE
NAME

--

CENTRE
NUMBER

--	--	--	--	--

CANDIDATE
NUMBER

--	--	--	--



CAMBRIDGE INTERNATIONAL MATHEMATICS

0607/02

Paper 2 (Extended)

For examination from 2020

SPECIMEN PAPER

45 minutes

You must answer on the question paper.

You will need: Geometrical instruments

INSTRUCTIONS

- Answer **all** questions.
- Use a black or dark blue pen. You may use an HB pencil for any diagrams or graphs.
- Write your name, centre number and candidate number in the boxes at the top of the page.
- Write your answer to each question in the space provided.
- Do **not** use an erasable pen or correction fluid.
- Do **not** write on any bar codes.
- Calculators must **not** be used in this paper.
- You may use tracing paper.
- You must show all necessary working clearly and you will be given marks for correct methods even if your answer is incorrect.
- All answers should be given in their simplest form.

INFORMATION

- The total mark for this paper is 40.
- The number of marks for each question or part question is shown in brackets [].

This document has **8** pages. Blank pages are indicated.

Formula List

For the equation $ax^2 + bx + c = 0$ $x = \frac{-b \pm \sqrt{b^2 - 4ac}}{2a}$

Curved surface area, A , of cylinder of radius r , height h . $A = 2\pi rh$

Curved surface area, A , of cone of radius r , sloping edge l . $A = \pi rl$

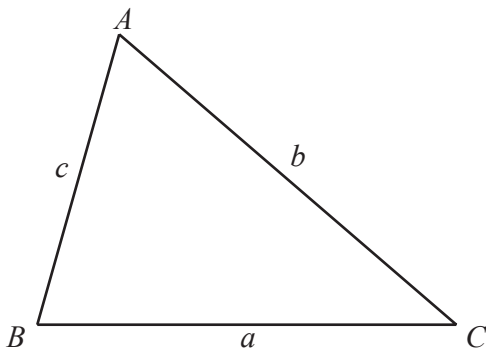
Curved surface area, A , of sphere of radius r . $A = 4\pi r^2$

Volume, V , of pyramid, base area A , height h . $V = \frac{1}{3}Ah$

Volume, V , of cylinder of radius r , height h . $V = \pi r^2 h$

Volume, V , of cone of radius r , height h . $V = \frac{1}{3}\pi r^2 h$

Volume, V , of sphere of radius r . $V = \frac{4}{3}\pi r^3$



$$\frac{a}{\sin A} = \frac{b}{\sin B} = \frac{c}{\sin C}$$

$$a^2 = b^2 + c^2 - 2bc \cos A$$

$$\text{Area} = \frac{1}{2}bc \sin A$$

Answer **all** the questions.

- 1 Find the highest common factor (HCF) of 60 and 90.

..... [1]

- 2 Insert one pair of brackets to make the statement correct.

$$5 - 2 + 3 \times 2 = -5 \quad [1]$$

3 $\mathbf{p} = \begin{pmatrix} 2 \\ 3 \end{pmatrix}$ $\mathbf{q} = \begin{pmatrix} 1 \\ 6 \end{pmatrix}$

Find $2\mathbf{p} - 3\mathbf{q}$.

$\begin{pmatrix} \\ \end{pmatrix}$ [2]

- 4 Write 0.72 as a fraction in its lowest terms.

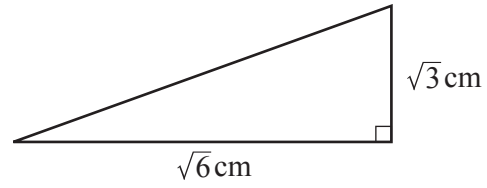
..... [1]

- 5 The mean of a list of 9 numbers is 6.
When a 10th number is included in the list the mean is 5.5 .

Find the value of this 10th number.

..... [2]

6

NOT TO
SCALE

Find the length of the hypotenuse of the triangle.

..... cm [2]

7 Solve the simultaneous equations.

$$u - w = 9$$

$$3u + w = 19$$

$$u = \dots\dots\dots$$

$$w = \dots\dots\dots [2]$$

8 The scale of a map is 1 : 250 000 .

Find the actual distance, in kilometres, between two cities which are 42 cm apart on the map.

..... km [2]

- 9 $|x| < 4$ and x is an integer.

Find the smallest possible value of x .

..... [1]

- 10 The first 4 terms of a sequence are 20, 13, 6 and -1 .

Find

- (a) the next term,

..... [1]

- (b) the n th term.

..... [2]

- 11 Make u the subject of the formula.

$$v^2 = u^2 + 2as$$

$u =$ [2]

- 12 Factorise completely.

$$2a - b + 2ax - bx$$

..... [2]

13 Find the exact value of

(a) 3^{-3} ,

..... [1]

(b) $16^{\frac{3}{4}}$,

..... [1]

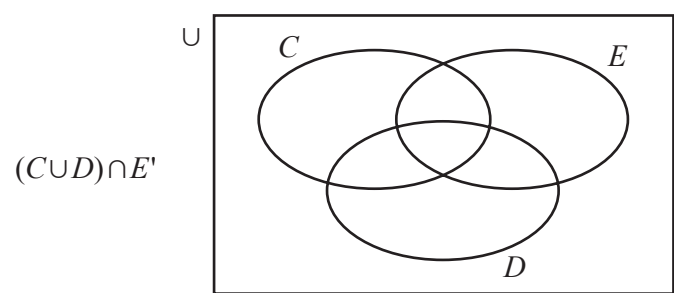
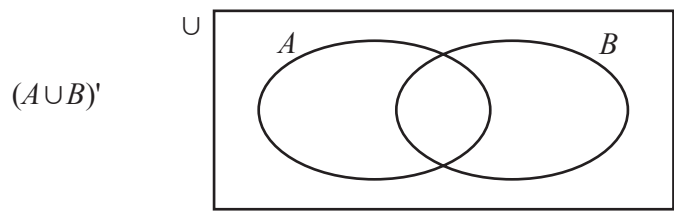
(c) $\cos 30^\circ$.

..... [1]

14 Simplify $(64x^{12})^{\frac{1}{6}}$.

..... [2]

15 On each Venn diagram, shade the region indicated.



[2]

16 Find the equation of the straight line passing through $(-2, -4)$ and $(2, 0)$.

..... [3]

17 Rationalise the denominator.

$$\frac{3}{\sqrt{5} + 2}$$

..... [2]

18 (a) Factorise $3y - y^2$.

..... [1]

(b) Simplify $\frac{3y - y^2}{9 - y^2}$.

..... [2]

Questions 19 and 20 are printed on the next page.

19 Find the value of

(a) $\frac{\log 4}{\log 8}$,

..... [2]

(b) $\log_4 8$.

..... [1]

20 $g(x) = \frac{2x+1}{x-1}$, $x \neq 1$

Solve the equation $g^{-1}(x) = 2$.

$x =$ [1]

Permission to reproduce items where third-party owned material protected by copyright is included has been sought and cleared where possible. Every reasonable effort has been made by the publisher (UCLES) to trace copyright holders, but if any items requiring clearance have unwittingly been included, the publisher will be pleased to make amends at the earliest possible opportunity.

Cambridge Assessment International Education is part of the Cambridge Assessment Group. Cambridge Assessment is the brand name of the University of Cambridge Local Examinations Syndicate (UCLES), which itself is a department of the University of Cambridge.